



NAME: _____



FULL SET (2s TO 12s)


POP



STAR



AIR



ROX



BOLT




ELECTRA




GROOVE



DAZZLE




BAZ



ALTO



VIBE



SCORE

BASELINE

CHECK 1

CHECK 2



BASELINE



Name: _____

Date: _____

1. $10 \times 5 =$ _____

21. $7 \times 6 =$ _____

41. $72 \div 8 =$ _____

2. $6 \times 3 =$ _____

22. $10 \times 3 =$ _____

42. $30 \div 10 =$ _____

3. $7 \times 7 =$ _____

23. $11 \times 8 =$ _____

43. $100 \div 10 =$ _____

4. $4 \times 4 =$ _____

24. $10 \times 9 =$ _____

44. $50 \div 10 =$ _____

5. $2 \times 1 =$ _____

25. $5 \times 6 =$ _____

45. $36 \div 9 =$ _____

6. $8 \times 1 =$ _____

26. $8 \times 12 =$ _____

46. $60 \div 6 =$ _____

7. $2 \times 5 =$ _____

27. $7 \times 4 =$ _____

47. $42 \div 6 =$ _____

8. $1 \times 9 =$ _____

28. $12 \times 4 =$ _____

48. $99 \div 11 =$ _____

9. $3 \times 12 =$ _____

29. $2 \times 10 =$ _____

49. $70 \div 7 =$ _____

10. $12 \times 3 =$ _____

30. $6 \times 11 =$ _____

50. $14 \div 2 =$ _____

11. $8 \times 5 =$ _____

31. $12 \times 3 =$ _____

51. $22 \div 2 =$ _____

12. $4 \times 11 =$ _____

32. $42 \div 7 =$ _____

52. $63 \div 9 =$ _____

13. $12 \times 12 =$ _____

33. $45 \div 5 =$ _____

53. $16 \div 4 =$ _____

14. $6 \times 8 =$ _____

34. $36 \div 12 =$ _____

54. $121 \div 11 =$ _____

15. $10 \times 8 =$ _____

35. $32 \div 8 =$ _____

55. $21 \div 3 =$ _____

16. $11 \times 12 =$ _____

36. $12 \div 3 =$ _____

56. $25 \div 5 =$ _____

17. $9 \times 2 =$ _____

37. $84 \div 7 =$ _____

57. $12 \div 4 =$ _____

18. $12 \times 11 =$ _____

38. $5 \div 1 =$ _____

58. $81 \div 9 =$ _____

19. $8 \times 6 =$ _____

39. $56 \div 8 =$ _____

59. $72 \div 6 =$ _____

20. $1 \times 3 =$ _____

40. $12 \div 6 =$ _____

60. $40 \div 4 =$ _____

SCORE:
(5 minute limit)

/60

TIME TAKEN (optional)

MINUTES SECONDS



Name: _____

Date: _____

MULTIPLICATION 1

Testing 2, 3, 4, 5, 6, 7, 8, 9, 10, 11, 12

1. $6 \times 8 =$ _____

2. $4 \times 7 =$ _____

3. $5 \times 1 =$ _____

4. $3 \times 10 =$ _____

5. $1 \times 11 =$ _____

6. $10 \times 3 =$ _____

7. $9 \times 12 =$ _____

8. $12 \times 11 =$ _____

9. $12 \times 2 =$ _____

10. $9 \times 9 =$ _____

11. $5 \times 7 =$ _____

12. $1 \times 5 =$ _____

13. $7 \times 7 =$ _____

14. $11 \times 2 =$ _____

15. $12 \times 7 =$ _____

16. $4 \times 12 =$ _____

17. $8 \times 5 =$ _____

18. $3 \times 4 =$ _____

19. $1 \times 12 =$ _____

20. $10 \times 7 =$ _____

21. $7 \times 9 =$ _____

22. $8 \times 4 =$ _____

23. $12 \times 2 =$ _____

24. $9 \times 2 =$ _____

25. $12 \times 8 =$ _____

26. $9 \times 10 =$ _____

27. $6 \times 9 =$ _____

28. $11 \times 6 =$ _____

29. $7 \times 12 =$ _____

30. $8 \times 3 =$ _____

31. $3 \times 7 =$ _____

32. $1 \times 11 =$ _____

33. $8 \times 12 =$ _____

34. $2 \times 6 =$ _____

35. $6 \times 9 =$ _____

36. $9 \times 4 =$ _____

37. $10 \times 8 =$ _____

38. $11 \times 6 =$ _____

39. $8 \times 6 =$ _____

40. $12 \times 12 =$ _____

41. $8 \times 4 =$ _____

42. $11 \times 6 =$ _____

43. $4 \times 7 =$ _____

44. $2 \times 8 =$ _____

45. $7 \times 1 =$ _____

46. $9 \times 6 =$ _____

47. $2 \times 9 =$ _____

48. $10 \times 4 =$ _____

49. $11 \times 9 =$ _____

50. $7 \times 6 =$ _____

51. $8 \times 11 =$ _____

52. $11 \times 5 =$ _____

53. $4 \times 1 =$ _____

54. $7 \times 12 =$ _____

55. $7 \times 8 =$ _____

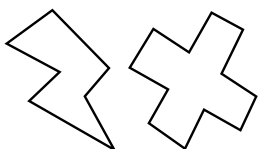
56. $3 \times 8 =$ _____

57. $3 \times 11 =$ _____

58. $8 \times 12 =$ _____

59. $6 \times 2 =$ _____

60. $4 \times 8 =$ _____



SCORE:

Grown-ups:
Can learners spot links between neighbouring questions?



Name: _____

Date: _____

MISSING NUMBER 1

Testing 2, 3, 4, 5, 6, 7, 8, 9, 10, 11, 12

1. _____ \times 9 = 27

21. _____ \times 4 = 48

41. 11 \times _____ = 66

2. _____ \times 10 = 80

22. _____ \times 12 = 96

42. 7 \times _____ = 42

3. 1 \times _____ = 4

23. _____ \times 3 = 30

43. _____ \times 3 = 18

4. 10 \times _____ = 80

24. _____ \times 10 = 40

44. _____ \times 3 = 30

5. _____ \times 3 = 3

25. _____ \times 6 = 12

45. 2 \times _____ = 18

6. _____ \times 3 = 24

26. _____ \times 3 = 9

46. _____ \times 2 = 24

7. _____ \times 6 = 54

27. _____ \times 9 = 81

47. 6 \times _____ = 24

8. 4 \times _____ = 48

28. _____ \times 3 = 27

48. _____ \times 8 = 56

9. 8 \times _____ = 80

29. 8 \times _____ = 32

49. 7 \times _____ = 56

10. _____ \times 4 = 24

30. _____ \times 7 = 56

50. _____ \times 6 = 66

11. _____ \times 4 = 36

31. 9 \times _____ = 54

51. 12 \times _____ = 72

12. _____ \times 7 = 35

32. 11 \times _____ = 121

52. _____ \times 12 = 96

13. _____ \times 8 = 64

33. _____ \times 10 = 20

53. _____ \times 5 = 10

14. _____ \times 2 = 16

34. _____ \times 11 = 121

54. 9 \times _____ = 81

15. 10 \times _____ = 100

35. 8 \times _____ = 96

55. 10 \times _____ = 120

16. 11 \times _____ = 55

36. 6 \times _____ = 54

56. _____ \times 2 = 22

17. 10 \times _____ = 40

37. 4 \times _____ = 48

57. _____ \times 7 = 7

18. 5 \times _____ = 20

38. _____ \times 10 = 90

58. _____ \times 8 = 72

19. 1 \times _____ = 9


39. 5 \times _____ = 25

59. _____ \times 9 = 90

20. _____ \times 6 = 60

40. _____ \times 4 = 40

60. _____ \times 4 = 32



SCORE:

Grown-ups:
Can learners spot links between neighbouring questions?



Name: _____

Date: _____

DIVISION 1

Testing 2, 3, 4, 5, 6, 7, 8, 9, 10, 11, 12

1. $40 \div 4 =$ _____

21. $22 \div 11 =$ _____

41. $48 \div 6 =$ _____

2. $24 \div 6 =$ _____

22. $30 \div 10 =$ _____

42. $16 \div 2 =$ _____

3. $22 \div 2 =$ _____

23. $90 \div 9 =$ _____

43. $18 \div 6 =$ _____

4. $14 \div 2 =$ _____

24. $88 \div 8 =$ _____

44. $40 \div 10 =$ _____

5. $54 \div 9 =$ _____

25. $48 \div 12 =$ _____

45. $18 \div 6 =$ _____

6. $100 \div 10 =$ _____

26. $42 \div 7 =$ _____

46. $16 \div 8 =$ _____

7. $44 \div 11 =$ _____

27. $56 \div 8 =$ _____

47. $96 \div 12 =$ _____

8. $56 \div 7 =$ _____

28. $84 \div 12 =$ _____

48. $16 \div 2 =$ _____

9. $18 \div 2 =$ _____

29. $30 \div 5 =$ _____

49. $22 \div 2 =$ _____

10. $4 \div 2 =$ _____

30. $72 \div 12 =$ _____

50. $72 \div 8 =$ _____

11. $6 \div 1 =$ _____

31. $77 \div 7 =$ _____

51. $45 \div 9 =$ _____

12. $9 \div 9 =$ _____

32. $18 \div 6 =$ _____

52. $42 \div 6 =$ _____

13. $72 \div 9 =$ _____

33. $28 \div 4 =$ _____

53. $45 \div 9 =$ _____

14. $12 \div 1 =$ _____

34. $25 \div 5 =$ _____

54. $30 \div 10 =$ _____

15. $27 \div 9 =$ _____

35. $4 \div 2 =$ _____

55. $63 \div 9 =$ _____

16. $32 \div 8 =$ _____

36. $18 \div 6 =$ _____

56. $12 \div 3 =$ _____

17. $18 \div 9 =$ _____

37. $30 \div 3 =$ _____

57. $24 \div 8 =$ _____

18. $10 \div 5 =$ _____

38. $21 \div 3 =$ _____

58. $42 \div 6 =$ _____

19. $121 \div 11 =$ _____


39. $9 \div 3 =$ _____

59. $28 \div 7 =$ _____

20. $7 \div 1 =$ _____

40. $88 \div 8 =$ _____

60. $33 \div 11 =$ _____



SCORE:

Grown-ups:
Can learners spot links between neighbouring questions?





CHECK 1



Name: _____

Date: _____

1. $2 \times 12 =$ _____

21. $10 \times 5 =$ _____

41. $72 \div 8 =$ _____

2. $5 \times 2 =$ _____

22. $2 \times 3 =$ _____

42. $18 \div 9 =$ _____

3. $11 \times 12 =$ _____

23. $10 \times 3 =$ _____

43. $36 \div 4 =$ _____

4. $4 \times 8 =$ _____

24. $10 \times 3 =$ _____

44. $36 \div 3 =$ _____

5. $1 \times 3 =$ _____

25. $2 \times 4 =$ _____

45. $40 \div 10 =$ _____

6. $7 \times 11 =$ _____

26. $4 \times 12 =$ _____

46. $2 \div 2 =$ _____

7. $3 \times 6 =$ _____

27. $1 \times 6 =$ _____

47. $48 \div 6 =$ _____

8. $7 \times 6 =$ _____

28. $12 \times 1 =$ _____

48. $120 \div 10 =$ _____

9. $3 \times 6 =$ _____

29. $7 \times 7 =$ _____

49. $30 \div 10 =$ _____

10. $1 \times 7 =$ _____

30. $5 \times 2 =$ _____

50. $42 \div 7 =$ _____

11. $7 \times 8 =$ _____

31. $3 \times 1 =$ _____

51. $66 \div 11 =$ _____

12. $7 \times 2 =$ _____

32. $22 \div 11 =$ _____

52. $96 \div 8 =$ _____

13. $8 \times 5 =$ _____

33. $96 \div 12 =$ _____

53. $15 \div 3 =$ _____

14. $5 \times 3 =$ _____

34. $132 \div 11 =$ _____

54. $48 \div 12 =$ _____

15. $11 \times 2 =$ _____

35. $27 \div 3 =$ _____

55. $32 \div 8 =$ _____

16. $8 \times 10 =$ _____

36. $49 \div 7 =$ _____

56. $64 \div 8 =$ _____

17. $2 \times 7 =$ _____

37. $100 \div 10 =$ _____

57. $5 \div 5 =$ _____

18. $4 \times 5 =$ _____

38. $30 \div 6 =$ _____

58. $16 \div 8 =$ _____

19. $2 \times 12 =$ _____

39. $12 \div 4 =$ _____

59. $12 \div 12 =$ _____

20. $8 \times 6 =$ _____

40. $70 \div 10 =$ _____

60. $14 \div 2 =$ _____

SCORE:
(5 minute limit)

/60

TIME TAKEN (optional)

MINUTES SECONDS



Name: _____

Date: _____

MULTIPLICATION 2

Testing 2, 3, 4, 5, 6, 7, 8, 9, 10, 11, 12

1. $7 \times 12 =$ _____

2. $8 \times 2 =$ _____

3. $8 \times 9 =$ _____

4. $1 \times 3 =$ _____

5. $12 \times 5 =$ _____

6. $9 \times 4 =$ _____

7. $6 \times 10 =$ _____

8. $3 \times 3 =$ _____

9. $11 \times 9 =$ _____

10. $10 \times 8 =$ _____

11. $8 \times 3 =$ _____

12. $9 \times 6 =$ _____

13. $7 \times 10 =$ _____

14. $5 \times 3 =$ _____

15. $9 \times 6 =$ _____

16. $6 \times 1 =$ _____

17. $2 \times 8 =$ _____

18. $1 \times 12 =$ _____

19. $7 \times 9 =$ _____

20. $3 \times 5 =$ _____

21. $9 \times 4 =$ _____

22. $5 \times 3 =$ _____

23. $9 \times 10 =$ _____

24. $2 \times 5 =$ _____

25. $1 \times 10 =$ _____

26. $8 \times 2 =$ _____

27. $3 \times 5 =$ _____

28. $5 \times 5 =$ _____

29. $12 \times 9 =$ _____

30. $4 \times 4 =$ _____

31. $12 \times 2 =$ _____

32. $4 \times 5 =$ _____

33. $2 \times 8 =$ _____

34. $2 \times 6 =$ _____

35. $8 \times 4 =$ _____

36. $9 \times 9 =$ _____

37. $4 \times 8 =$ _____

38. $11 \times 12 =$ _____

39. $3 \times 5 =$ _____

40. $5 \times 6 =$ _____

41. $8 \times 1 =$ _____

42. $12 \times 2 =$ _____

43. $7 \times 4 =$ _____

44. $9 \times 2 =$ _____

45. $11 \times 10 =$ _____

46. $8 \times 1 =$ _____

47. $3 \times 7 =$ _____

48. $6 \times 6 =$ _____

49. $6 \times 8 =$ _____

50. $2 \times 3 =$ _____

51. $7 \times 11 =$ _____

52. $3 \times 2 =$ _____

53. $4 \times 6 =$ _____

54. $12 \times 6 =$ _____

55. $3 \times 4 =$ _____

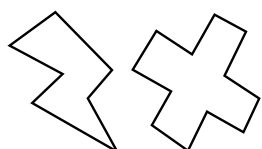
56. $6 \times 10 =$ _____

57. $10 \times 8 =$ _____

58. $1 \times 9 =$ _____

59. $6 \times 8 =$ _____

60. $10 \times 12 =$ _____



SCORE:

Grown-ups:
Can learners spot links between neighbouring questions?



Name: _____

Date: _____

MISSING NUMBER 2

Testing 2, 3, 4, 5, 6, 7, 8, 9, 10, 11, 12

1. $1 \times \underline{\quad} = 6$

21. $\underline{\quad} \times 8 = 64$

41. $\underline{\quad} \times 2 = 2$

2. $3 \times \underline{\quad} = 27$

22. $10 \times \underline{\quad} = 20$

42. $7 \times \underline{\quad} = 35$

3. $5 \times \underline{\quad} = 15$

23. $\underline{\quad} \times 4 = 32$

43. $9 \times \underline{\quad} = 45$

4. $2 \times \underline{\quad} = 16$

24. $\underline{\quad} \times 2 = 4$

44. $2 \times \underline{\quad} = 10$

5. $7 \times \underline{\quad} = 49$

25. $11 \times \underline{\quad} = 66$

45. $3 \times \underline{\quad} = 9$

6. $\underline{\quad} \times 11 = 132$

26. $2 \times \underline{\quad} = 6$

46. $\underline{\quad} \times 12 = 84$

7. $7 \times \underline{\quad} = 42$

27. $\underline{\quad} \times 12 = 132$

47. $\underline{\quad} \times 9 = 9$

8. $\underline{\quad} \times 4 = 4$

28. $7 \times \underline{\quad} = 14$

48. $\underline{\quad} \times 1 = 11$

9. $\underline{\quad} \times 11 = 77$

29. $3 \times \underline{\quad} = 9$

49. $\underline{\quad} \times 10 = 30$

10. $\underline{\quad} \times 2 = 10$

30. $8 \times \underline{\quad} = 88$

50. $4 \times \underline{\quad} = 40$

11. $6 \times \underline{\quad} = 18$

31. $6 \times \underline{\quad} = 18$

51. $9 \times \underline{\quad} = 72$

12. $\underline{\quad} \times 9 = 63$

32. $\underline{\quad} \times 6 = 6$

52. $\underline{\quad} \times 6 = 18$

13. $9 \times \underline{\quad} = 99$

33. $11 \times \underline{\quad} = 77$

53. $\underline{\quad} \times 7 = 42$

14. $\underline{\quad} \times 4 = 44$

34. $\underline{\quad} \times 5 = 25$

54. $\underline{\quad} \times 11 = 88$

15. $1 \times \underline{\quad} = 6$

35. $8 \times \underline{\quad} = 96$

55. $\underline{\quad} \times 8 = 16$

16. $\underline{\quad} \times 7 = 14$

36. $\underline{\quad} \times 4 = 28$

56. $\underline{\quad} \times 4 = 40$

17. $8 \times \underline{\quad} = 8$

37. $12 \times \underline{\quad} = 36$

57. $\underline{\quad} \times 10 = 30$

18. $8 \times \underline{\quad} = 32$

38. $5 \times \underline{\quad} = 20$

58. $\underline{\quad} \times 7 = 28$

19. $\underline{\quad} \times 1 = 7$


39. $\underline{\quad} \times 3 = 33$

59. $\underline{\quad} \times 5 = 10$

20. $9 \times \underline{\quad} = 54$

40. $6 \times \underline{\quad} = 48$

60. $\underline{\quad} \times 5 = 50$



SCORE:

Grown-ups:

Can learners spot links between neighbouring questions?



Name: _____

Date: _____

DIVISION 2

Testing 2, 3, 4, 5, 6, 7, 8, 9, 10, 11, 12

1. $72 \div 12 =$ _____

21. $36 \div 4 =$ _____

41. $6 \div 3 =$ _____

2. $4 \div 4 =$ _____

22. $27 \div 3 =$ _____

42. $96 \div 8 =$ _____

3. $24 \div 2 =$ _____

23. $6 \div 6 =$ _____

43. $16 \div 4 =$ _____

4. $18 \div 9 =$ _____

24. $56 \div 7 =$ _____

44. $24 \div 8 =$ _____

5. $40 \div 10 =$ _____

25. $49 \div 7 =$ _____

45. $48 \div 6 =$ _____

6. $80 \div 10 =$ _____

26. $121 \div 11 =$ _____

46. $21 \div 3 =$ _____

7. $32 \div 8 =$ _____

27. $35 \div 5 =$ _____

47. $33 \div 3 =$ _____

8. $36 \div 9 =$ _____

28. $9 \div 3 =$ _____

48. $44 \div 11 =$ _____

9. $40 \div 10 =$ _____

29. $64 \div 8 =$ _____

49. $22 \div 2 =$ _____

10. $15 \div 3 =$ _____

30. $18 \div 6 =$ _____

50. $81 \div 9 =$ _____

11. $10 \div 1 =$ _____

31. $10 \div 1 =$ _____

51. $84 \div 12 =$ _____

12. $36 \div 6 =$ _____

32. $54 \div 9 =$ _____

52. $32 \div 4 =$ _____

13. $96 \div 8 =$ _____

33. $30 \div 10 =$ _____

53. $10 \div 10 =$ _____

14. $144 \div 12 =$ _____

34. $54 \div 9 =$ _____

54. $10 \div 2 =$ _____

15. $11 \div 1 =$ _____

35. $72 \div 6 =$ _____

55. $35 \div 7 =$ _____

16. $20 \div 10 =$ _____

36. $48 \div 8 =$ _____

56. $12 \div 6 =$ _____

17. $8 \div 4 =$ _____

37. $120 \div 10 =$ _____

57. $33 \div 11 =$ _____

18. $16 \div 4 =$ _____

38. $16 \div 2 =$ _____

58. $32 \div 8 =$ _____

19. $6 \div 2 =$ _____

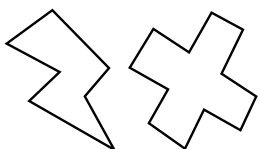
39. $36 \div 3 =$ _____

59. $12 \div 2 =$ _____

20. $84 \div 12 =$ _____

40. $36 \div 3 =$ _____

60. $15 \div 3 =$ _____



SCORE:

Grown-ups:
Can learners spot links between neighbouring questions?





CHECK 2



Name: _____

Date: _____

1. $3 \times 10 =$ _____

21. $5 \times 8 =$ _____

41. $32 \div 8 =$ _____

2. $2 \times 2 =$ _____

22. $8 \times 3 =$ _____

42. $36 \div 6 =$ _____

3. $7 \times 9 =$ _____

23. $4 \times 2 =$ _____

43. $90 \div 10 =$ _____

4. $1 \times 9 =$ _____

24. $6 \times 4 =$ _____

44. $12 \div 3 =$ _____

5. $4 \times 12 =$ _____

25. $6 \times 11 =$ _____

45. $15 \div 3 =$ _____

6. $6 \times 7 =$ _____

26. $2 \times 11 =$ _____

46. $72 \div 9 =$ _____

7. $2 \times 4 =$ _____

27. $1 \times 2 =$ _____

47. $20 \div 10 =$ _____

8. $7 \times 3 =$ _____

28. $3 \times 9 =$ _____

48. $24 \div 6 =$ _____

9. $5 \times 3 =$ _____

29. $11 \times 4 =$ _____

49. $30 \div 6 =$ _____

10. $1 \times 8 =$ _____

30. $9 \times 2 =$ _____

50. $12 \div 6 =$ _____

11. $8 \times 8 =$ _____

31. $5 \times 9 =$ _____

51. $77 \div 11 =$ _____

12. $5 \times 10 =$ _____

32. $16 \div 2 =$ _____

52. $70 \div 7 =$ _____

13. $9 \times 2 =$ _____

33. $2 \div 2 =$ _____

53. $16 \div 4 =$ _____

14. $7 \times 5 =$ _____

34. $54 \div 6 =$ _____

54. $11 \div 11 =$ _____

15. $11 \times 8 =$ _____

35. $7 \div 1 =$ _____

55. $8 \div 1 =$ _____

16. $7 \times 2 =$ _____

36. $45 \div 9 =$ _____

56. $42 \div 7 =$ _____

17. $9 \times 11 =$ _____

37. $90 \div 9 =$ _____

57. $9 \div 9 =$ _____

18. $10 \times 11 =$ _____

38. $6 \div 3 =$ _____

58. $21 \div 7 =$ _____

19. $9 \times 1 =$ _____

39. $120 \div 10 =$ _____

59. $84 \div 7 =$ _____

20. $4 \times 4 =$ _____

40. $15 \div 3 =$ _____

60. $32 \div 8 =$ _____

SCORE:
(5 minute limit)

/60

TIME TAKEN (optional)

MINUTES SECONDS

