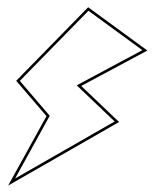


NAME: _____



6s


7s

9s

BAZ

ALTO

ROX



SCORE

BASELINE

CHECK 1

CHECK 2



BASELINE



Name: _____

Date: _____

1. $9 \times 5 =$ _____

21. $7 \times 6 =$ _____

41. $27 \div 3 =$ _____

2. $1 \times 9 =$ _____

22. $6 \times 9 =$ _____

42. $12 \div 2 =$ _____

3. $8 \times 7 =$ _____

23. $2 \times 6 =$ _____

43. $60 \div 10 =$ _____

4. $9 \times 3 =$ _____

24. $7 \times 9 =$ _____

44. $7 \div 1 =$ _____

5. $9 \times 1 =$ _____

25. $6 \times 2 =$ _____

45. $70 \div 7 =$ _____

6. $1 \times 6 =$ _____

26. $7 \times 9 =$ _____

46. $35 \div 5 =$ _____

7. $9 \times 9 =$ _____

27. $6 \times 4 =$ _____

47. $56 \div 7 =$ _____

8. $7 \times 5 =$ _____

28. $4 \times 6 =$ _____

48. $12 \div 2 =$ _____

9. $6 \times 8 =$ _____

29. $5 \times 6 =$ _____

49. $6 \div 6 =$ _____

10. $1 \times 7 =$ _____

30. $9 \times 12 =$ _____

50. $56 \div 7 =$ _____

11. $8 \times 6 =$ _____

31. $7 \times 9 =$ _____

51. $63 \div 7 =$ _____

12. $5 \times 9 =$ _____

32. $84 \div 7 =$ _____

52. $90 \div 9 =$ _____

13. $7 \times 9 =$ _____

33. $36 \div 6 =$ _____

53. $36 \div 9 =$ _____

14. $9 \times 12 =$ _____

34. $28 \div 7 =$ _____

54. $63 \div 9 =$ _____

15. $2 \times 7 =$ _____

35. $6 \div 1 =$ _____

55. $9 \div 9 =$ _____

16. $4 \times 6 =$ _____

36. $21 \div 3 =$ _____

56. $54 \div 9 =$ _____

17. $9 \times 6 =$ _____

37. $70 \div 7 =$ _____

57. $42 \div 6 =$ _____

18. $1 \times 6 =$ _____

38. $7 \div 1 =$ _____

58. $60 \div 10 =$ _____

19. $11 \times 6 =$ _____

39. $42 \div 7 =$ _____

59. $18 \div 9 =$ _____

20. $11 \times 9 =$ _____

40. $42 \div 6 =$ _____

60. $12 \div 2 =$ _____

SCORE:
(5 minute limit)

/60

TIME TAKEN (optional)

MINUTES SECONDS



Name: _____

Date: _____

MULTIPLICATION 1

Testing 6, 7, 9

1. $9 \times 8 =$ _____

2. $9 \times 9 =$ _____

3. $9 \times 11 =$ _____

4. $5 \times 7 =$ _____

5. $3 \times 9 =$ _____

6. $8 \times 6 =$ _____

7. $6 \times 8 =$ _____

8. $9 \times 10 =$ _____

9. $5 \times 6 =$ _____

10. $9 \times 3 =$ _____

11. $5 \times 7 =$ _____

12. $11 \times 6 =$ _____

13. $7 \times 11 =$ _____

14. $7 \times 10 =$ _____

15. $6 \times 5 =$ _____

16. $7 \times 9 =$ _____

17. $3 \times 6 =$ _____

18. $3 \times 9 =$ _____

19. $5 \times 6 =$ _____

20. $1 \times 9 =$ _____

21. $12 \times 7 =$ _____

22. $7 \times 7 =$ _____

23. $8 \times 6 =$ _____

24. $9 \times 2 =$ _____

25. $3 \times 9 =$ _____

26. $7 \times 8 =$ _____

27. $2 \times 9 =$ _____

28. $8 \times 6 =$ _____

29. $3 \times 7 =$ _____

30. $6 \times 10 =$ _____

31. $1 \times 6 =$ _____

32. $9 \times 4 =$ _____

33. $7 \times 10 =$ _____

34. $4 \times 7 =$ _____

35. $9 \times 10 =$ _____

36. $6 \times 12 =$ _____

37. $9 \times 3 =$ _____

38. $9 \times 6 =$ _____

39. $10 \times 9 =$ _____

40. $6 \times 7 =$ _____

41. $9 \times 12 =$ _____

42. $9 \times 3 =$ _____

43. $7 \times 9 =$ _____

44. $3 \times 6 =$ _____

45. $11 \times 9 =$ _____

46. $9 \times 2 =$ _____

47. $8 \times 6 =$ _____

48. $7 \times 7 =$ _____

49. $7 \times 11 =$ _____

50. $11 \times 6 =$ _____

51. $9 \times 6 =$ _____

52. $4 \times 7 =$ _____

53. $7 \times 12 =$ _____

54. $4 \times 7 =$ _____

55. $6 \times 5 =$ _____

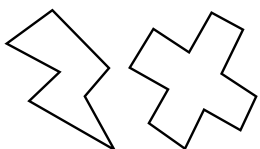
56. $7 \times 3 =$ _____

57. $11 \times 6 =$ _____

58. $7 \times 12 =$ _____

59. $7 \times 7 =$ _____

60. $4 \times 6 =$ _____



SCORE:

Grown-ups:
Can learners spot links between neighbouring questions?



Name: _____

Date: _____

MISSING NUMBER 1

Testing 6, 7, 9

1. _____ \times 10 = 60

2. 5 \times _____ = 30

3. 9 \times _____ = 54

4. _____ \times 10 = 60

5. _____ \times 6 = 36

6. 6 \times _____ = 36

7. _____ \times 9 = 27

8. 6 \times _____ = 54

9. 5 \times _____ = 45

10. 7 \times _____ = 35

11. _____ \times 10 = 60

12. _____ \times 1 = 6

13. _____ \times 9 = 45

14. _____ \times 9 = 36

15. 2 \times _____ = 12

16. 7 \times _____ = 63

17. _____ \times 6 = 60

18. _____ \times 11 = 77

19. _____ \times 3 = 18

20. 4 \times _____ = 28

21. 9 \times _____ = 99

22. 2 \times _____ = 18

23. _____ \times 6 = 54

24. 9 \times _____ = 27

25. 12 \times _____ = 84

26. _____ \times 6 = 48

27. 7 \times _____ = 28

28. 6 \times _____ = 66

29. _____ \times 9 = 63

30. _____ \times 10 = 90

31. 9 \times _____ = 45

32. 7 \times _____ = 56

33. _____ \times 9 = 36

34. _____ \times 6 = 72

35. _____ \times 9 = 9

36. _____ \times 9 = 27

37. 11 \times _____ = 66

38. _____ \times 8 = 48

39. _____ \times 6 = 54

40. _____ \times 9 = 99

41. _____ \times 2 = 18

42. _____ \times 7 = 63

43. 2 \times _____ = 12

44. _____ \times 9 = 81

45. _____ \times 6 = 24

46. _____ \times 3 = 21

47. 8 \times _____ = 48

48. 9 \times _____ = 63

49. 6 \times _____ = 24

50. 6 \times _____ = 42

51. _____ \times 7 = 63

52. 4 \times _____ = 24

53. 4 \times _____ = 24

54. _____ \times 9 = 54

55. _____ \times 7 = 42

56. 4 \times _____ = 36

57. 6 \times _____ = 60

58. _____ \times 12 = 108

59. 7 \times _____ = 7

60. _____ \times 8 = 48



SCORE:

Grown-ups:
Can learners spot links between neighbouring questions?



Name: _____

Date: _____

DIVISION 1

Testing 6, 7, 9

1. $24 \div 4 =$ _____

2. $21 \div 3 =$ _____

3. $48 \div 8 =$ _____

4. $14 \div 2 =$ _____

5. $36 \div 6 =$ _____

6. $54 \div 6 =$ _____

7. $54 \div 9 =$ _____

8. $35 \div 7 =$ _____

9. $90 \div 10 =$ _____

10. $77 \div 11 =$ _____

11. $6 \div 6 =$ _____

12. $12 \div 2 =$ _____

13. $18 \div 6 =$ _____

14. $63 \div 7 =$ _____

15. $6 \div 1 =$ _____

16. $54 \div 6 =$ _____

17. $18 \div 9 =$ _____

18. $49 \div 7 =$ _____

19. $77 \div 7 =$ _____

20. $42 \div 7 =$ _____

21. $24 \div 6 =$ _____

22. $12 \div 6 =$ _____

23. $18 \div 3 =$ _____

24. $56 \div 7 =$ _____

25. $49 \div 7 =$ _____

26. $63 \div 7 =$ _____

27. $28 \div 4 =$ _____

28. $108 \div 9 =$ _____

29. $108 \div 9 =$ _____

30. $18 \div 3 =$ _____

31. $63 \div 9 =$ _____

32. $42 \div 6 =$ _____

33. $84 \div 7 =$ _____

34. $30 \div 6 =$ _____

35. $21 \div 3 =$ _____

36. $70 \div 7 =$ _____

37. $36 \div 9 =$ _____

38. $36 \div 6 =$ _____

39. $99 \div 11 =$ _____

40. $24 \div 4 =$ _____

41. $14 \div 2 =$ _____

42. $36 \div 6 =$ _____

43. $48 \div 6 =$ _____

44. $99 \div 11 =$ _____

45. $54 \div 6 =$ _____

46. $49 \div 7 =$ _____

47. $7 \div 7 =$ _____

48. $14 \div 2 =$ _____

49. $54 \div 6 =$ _____

50. $36 \div 9 =$ _____

51. $63 \div 7 =$ _____

52. $35 \div 7 =$ _____

53. $30 \div 5 =$ _____

54. $90 \div 9 =$ _____

55. $90 \div 9 =$ _____

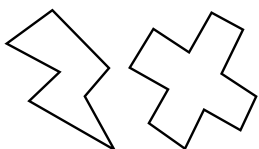
56. $99 \div 9 =$ _____

57. $99 \div 11 =$ _____

58. $42 \div 6 =$ _____

59. $63 \div 9 =$ _____

60. $21 \div 3 =$ _____



SCORE:

Grown-ups:
Can learners spot links between neighbouring questions?





CHECK 1



Name: _____

Date: _____

1. $9 \times 6 =$ _____

21. $2 \times 6 =$ _____

41. $70 \div 7 =$ _____

2. $6 \times 12 =$ _____

22. $6 \times 9 =$ _____

42. $6 \div 1 =$ _____

3. $9 \times 1 =$ _____

23. $10 \times 7 =$ _____

43. $90 \div 10 =$ _____

4. $12 \times 9 =$ _____

24. $5 \times 7 =$ _____

44. $27 \div 9 =$ _____

5. $10 \times 9 =$ _____

25. $6 \times 12 =$ _____

45. $6 \div 6 =$ _____

6. $7 \times 5 =$ _____

26. $6 \times 9 =$ _____

46. $9 \div 1 =$ _____

7. $7 \times 6 =$ _____

27. $10 \times 9 =$ _____

47. $72 \div 9 =$ _____

8. $6 \times 9 =$ _____

28. $9 \times 10 =$ _____

48. $21 \div 7 =$ _____

9. $6 \times 6 =$ _____

29. $9 \times 6 =$ _____

49. $108 \div 9 =$ _____

10. $9 \times 9 =$ _____

30. $3 \times 9 =$ _____

50. $49 \div 7 =$ _____

11. $6 \times 10 =$ _____

31. $11 \times 9 =$ _____

51. $36 \div 6 =$ _____

12. $6 \times 8 =$ _____

32. $99 \div 9 =$ _____

52. $63 \div 9 =$ _____

13. $5 \times 7 =$ _____

33. $36 \div 6 =$ _____

53. $63 \div 7 =$ _____

14. $6 \times 8 =$ _____

34. $54 \div 6 =$ _____

54. $108 \div 12 =$ _____

15. $5 \times 6 =$ _____

35. $77 \div 7 =$ _____

55. $7 \div 1 =$ _____

16. $1 \times 7 =$ _____

36. $42 \div 6 =$ _____

56. $42 \div 6 =$ _____

17. $7 \times 6 =$ _____

37. $63 \div 9 =$ _____

57. $54 \div 6 =$ _____

18. $7 \times 6 =$ _____

38. $90 \div 9 =$ _____

58. $12 \div 2 =$ _____

19. $6 \times 9 =$ _____

39. $7 \div 1 =$ _____

59. $66 \div 6 =$ _____

20. $9 \times 1 =$ _____

40. $6 \div 6 =$ _____

60. $48 \div 6 =$ _____

SCORE:
(5 minute limit)

/60

TIME TAKEN (optional)

MINUTES SECONDS



Name: _____

Date: _____

MULTIPLICATION 2

Testing 6, 7, 9

1. $9 \times 10 =$ _____

2. $11 \times 6 =$ _____

3. $2 \times 7 =$ _____

4. $1 \times 7 =$ _____

5. $7 \times 2 =$ _____

6. $7 \times 4 =$ _____

7. $12 \times 7 =$ _____

8. $5 \times 6 =$ _____

9. $9 \times 6 =$ _____

10. $6 \times 2 =$ _____

11. $9 \times 7 =$ _____

12. $11 \times 7 =$ _____

13. $7 \times 7 =$ _____

14. $2 \times 7 =$ _____

15. $6 \times 9 =$ _____

16. $6 \times 7 =$ _____

17. $7 \times 1 =$ _____

18. $7 \times 11 =$ _____

19. $7 \times 11 =$ _____

20. $9 \times 11 =$ _____

21. $5 \times 6 =$ _____

22. $7 \times 9 =$ _____

23. $3 \times 7 =$ _____

24. $5 \times 6 =$ _____

25. $7 \times 7 =$ _____

26. $8 \times 7 =$ _____

27. $8 \times 6 =$ _____

28. $7 \times 1 =$ _____

29. $8 \times 6 =$ _____

30. $9 \times 3 =$ _____

31. $10 \times 7 =$ _____

32. $10 \times 6 =$ _____

33. $7 \times 9 =$ _____

34. $6 \times 9 =$ _____

35. $7 \times 6 =$ _____

36. $7 \times 3 =$ _____

37. $7 \times 1 =$ _____

38. $1 \times 9 =$ _____

39. $2 \times 6 =$ _____

40. $10 \times 7 =$ _____

41. $6 \times 12 =$ _____

42. $9 \times 2 =$ _____

43. $9 \times 1 =$ _____

44. $6 \times 1 =$ _____

45. $6 \times 3 =$ _____

46. $5 \times 7 =$ _____

47. $9 \times 10 =$ _____

48. $6 \times 1 =$ _____

49. $7 \times 9 =$ _____

50. $7 \times 3 =$ _____

51. $2 \times 7 =$ _____

52. $7 \times 9 =$ _____

53. $7 \times 8 =$ _____

54. $6 \times 1 =$ _____

55. $3 \times 6 =$ _____

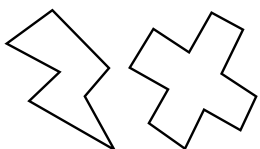
56. $7 \times 9 =$ _____

57. $6 \times 1 =$ _____

58. $1 \times 7 =$ _____

59. $7 \times 7 =$ _____

60. $12 \times 9 =$ _____



SCORE:

Grown-ups:
Can learners spot links between neighbouring questions?



Name: _____

MISSING NUMBER 2

Testing 6, 7, 9

Date: _____

1. $12 \times \underline{\quad} = 84$

21. $6 \times \underline{\quad} = 54$

41. $\underline{\quad} \times 9 = 54$

2. $3 \times \underline{\quad} = 18$

22. $9 \times \underline{\quad} = 36$

42. $\underline{\quad} \times 9 = 36$

3. $\underline{\quad} \times 10 = 60$

23. $\underline{\quad} \times 4 = 24$

43. $9 \times \underline{\quad} = 18$

4. $7 \times \underline{\quad} = 21$

24. $3 \times \underline{\quad} = 18$

44. $6 \times \underline{\quad} = 48$

5. $11 \times \underline{\quad} = 77$

25. $\underline{\quad} \times 6 = 6$

45. $\underline{\quad} \times 7 = 56$

6. $9 \times \underline{\quad} = 45$

26. $7 \times \underline{\quad} = 42$

46. $5 \times \underline{\quad} = 35$

7. $\underline{\quad} \times 6 = 60$

27. $\underline{\quad} \times 11 = 99$

47. $6 \times \underline{\quad} = 42$

8. $9 \times \underline{\quad} = 18$

28. $7 \times \underline{\quad} = 49$

48. $9 \times \underline{\quad} = 63$

9. $7 \times \underline{\quad} = 70$

29. $\underline{\quad} \times 10 = 90$

49. $7 \times \underline{\quad} = 63$

10. $7 \times \underline{\quad} = 49$

30. $\underline{\quad} \times 9 = 99$

50. $\underline{\quad} \times 9 = 27$

11. $\underline{\quad} \times 3 = 18$

31. $7 \times \underline{\quad} = 63$

51. $9 \times \underline{\quad} = 54$

12. $\underline{\quad} \times 8 = 56$

32. $\underline{\quad} \times 7 = 77$

52. $\underline{\quad} \times 3 = 18$

13. $2 \times \underline{\quad} = 14$

33. $7 \times \underline{\quad} = 35$

53. $9 \times \underline{\quad} = 18$

14. $12 \times \underline{\quad} = 84$

34. $7 \times \underline{\quad} = 7$

54. $\underline{\quad} \times 7 = 63$

15. $2 \times \underline{\quad} = 14$

35. $\underline{\quad} \times 8 = 72$

55. $7 \times \underline{\quad} = 63$

16. $\underline{\quad} \times 9 = 54$

36. $\underline{\quad} \times 8 = 72$

56. $\underline{\quad} \times 6 = 60$

17. $\underline{\quad} \times 3 = 27$

37. $\underline{\quad} \times 7 = 35$

57. $7 \times \underline{\quad} = 77$

18. $9 \times \underline{\quad} = 90$

38. $\underline{\quad} \times 6 = 6$

58. $\underline{\quad} \times 7 = 56$

19. $\underline{\quad} \times 5 = 35$

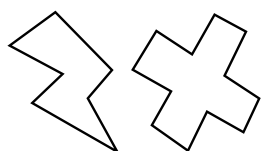
39. $\underline{\quad} \times 2 = 12$

59. $9 \times \underline{\quad} = 90$

20. $\underline{\quad} \times 12 = 108$

40. $\underline{\quad} \times 8 = 72$

60. $\underline{\quad} \times 7 = 70$



SCORE:

Grown-ups:
Can learners spot links between neighbouring questions?



Name: _____

Date: _____

DIVISION 2

Testing 6, 7, 9

1. $81 \div 9 =$ _____

2. $90 \div 10 =$ _____

3. $18 \div 6 =$ _____

4. $63 \div 9 =$ _____

5. $42 \div 7 =$ _____

6. $77 \div 7 =$ _____

7. $18 \div 6 =$ _____

8. $99 \div 11 =$ _____

9. $45 \div 9 =$ _____

10. $24 \div 4 =$ _____

11. $42 \div 7 =$ _____

12. $56 \div 7 =$ _____

13. $56 \div 7 =$ _____

14. $42 \div 6 =$ _____

15. $45 \div 5 =$ _____

16. $45 \div 9 =$ _____

17. $49 \div 7 =$ _____

18. $14 \div 7 =$ _____

19. $18 \div 2 =$ _____

20. $35 \div 5 =$ _____

21. $14 \div 2 =$ _____

22. $36 \div 6 =$ _____

23. $81 \div 9 =$ _____

24. $66 \div 11 =$ _____

25. $77 \div 11 =$ _____

26. $54 \div 6 =$ _____

27. $12 \div 2 =$ _____

28. $70 \div 7 =$ _____

29. $72 \div 9 =$ _____

30. $14 \div 7 =$ _____

31. $108 \div 9 =$ _____

32. $12 \div 6 =$ _____

33. $56 \div 7 =$ _____

34. $84 \div 7 =$ _____

35. $66 \div 11 =$ _____

36. $63 \div 9 =$ _____

37. $77 \div 11 =$ _____

38. $9 \div 9 =$ _____

39. $35 \div 7 =$ _____

40. $54 \div 6 =$ _____

41. $42 \div 6 =$ _____

42. $108 \div 9 =$ _____

43. $77 \div 11 =$ _____

44. $60 \div 6 =$ _____

45. $12 \div 6 =$ _____

46. $72 \div 6 =$ _____

47. $36 \div 6 =$ _____

48. $28 \div 7 =$ _____

49. $36 \div 9 =$ _____

50. $6 \div 1 =$ _____

51. $18 \div 6 =$ _____

52. $54 \div 9 =$ _____

53. $28 \div 7 =$ _____

54. $24 \div 4 =$ _____

55. $81 \div 9 =$ _____

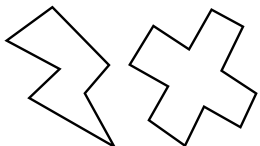
56. $27 \div 9 =$ _____

57. $42 \div 7 =$ _____

58. $24 \div 6 =$ _____

59. $36 \div 4 =$ _____

60. $42 \div 7 =$ _____



SCORE:

Grown-ups:
Can learners spot links between neighbouring questions?





CHECK 2



Name: _____

Date: _____

1. $9 \times 10 =$ _____

21. $7 \times 7 =$ _____

41. $28 \div 7 =$ _____

2. $12 \times 7 =$ _____

22. $7 \times 5 =$ _____

42. $45 \div 9 =$ _____

3. $7 \times 6 =$ _____

23. $9 \times 4 =$ _____

43. $84 \div 7 =$ _____

4. $1 \times 7 =$ _____

24. $3 \times 9 =$ _____

44. $66 \div 6 =$ _____

5. $6 \times 12 =$ _____

25. $9 \times 1 =$ _____

45. $18 \div 6 =$ _____

6. $11 \times 7 =$ _____

26. $6 \times 6 =$ _____

46. $66 \div 11 =$ _____

7. $9 \times 7 =$ _____

27. $6 \times 9 =$ _____

47. $81 \div 9 =$ _____

8. $1 \times 7 =$ _____

28. $6 \times 6 =$ _____

48. $35 \div 7 =$ _____

9. $7 \times 5 =$ _____

29. $6 \times 7 =$ _____

49. $14 \div 2 =$ _____

10. $6 \times 3 =$ _____

30. $7 \times 9 =$ _____

50. $27 \div 9 =$ _____

11. $10 \times 9 =$ _____

31. $2 \times 9 =$ _____

51. $36 \div 6 =$ _____

12. $9 \times 3 =$ _____

32. $45 \div 5 =$ _____

52. $45 \div 9 =$ _____

13. $9 \times 3 =$ _____

33. $12 \div 6 =$ _____

53. $99 \div 9 =$ _____

14. $9 \times 1 =$ _____

34. $72 \div 9 =$ _____

54. $12 \div 2 =$ _____

15. $5 \times 6 =$ _____

35. $30 \div 5 =$ _____

55. $63 \div 9 =$ _____

16. $2 \times 6 =$ _____

36. $48 \div 6 =$ _____

56. $28 \div 4 =$ _____

17. $6 \times 4 =$ _____

37. $45 \div 9 =$ _____

57. $84 \div 12 =$ _____

18. $7 \times 8 =$ _____

38. $99 \div 9 =$ _____

58. $18 \div 3 =$ _____

19. $5 \times 9 =$ _____

39. $21 \div 7 =$ _____

59. $35 \div 5 =$ _____

20. $5 \times 7 =$ _____

40. $49 \div 7 =$ _____

60. $66 \div 6 =$ _____

SCORE:
(5 minute limit)

/60

TIME TAKEN (optional)

MINUTES SECONDS

